

Which crackers do you need to pull to score:

- a) 8 points
- b) 7 points
- c) 5 points?

twinkl.co.uk
Christmas Bauble Challenge



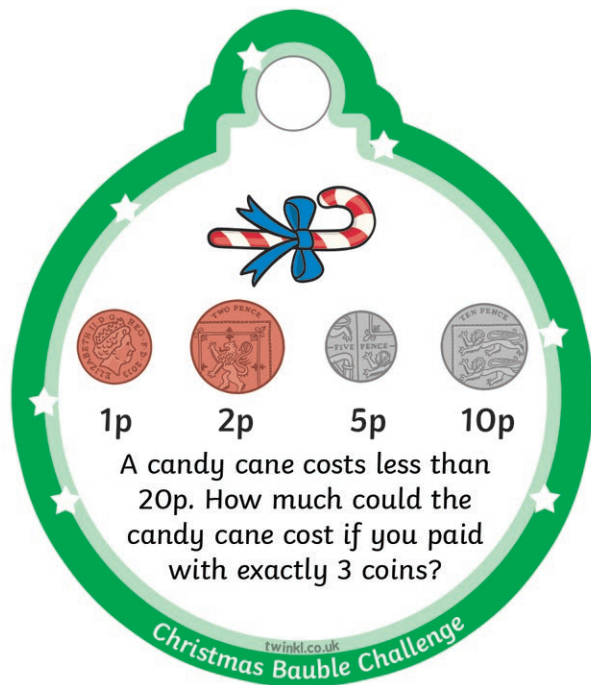
Which different coins could you use to pay for two mince pies?

twinkl.co.uk
Christmas Bauble Challenge



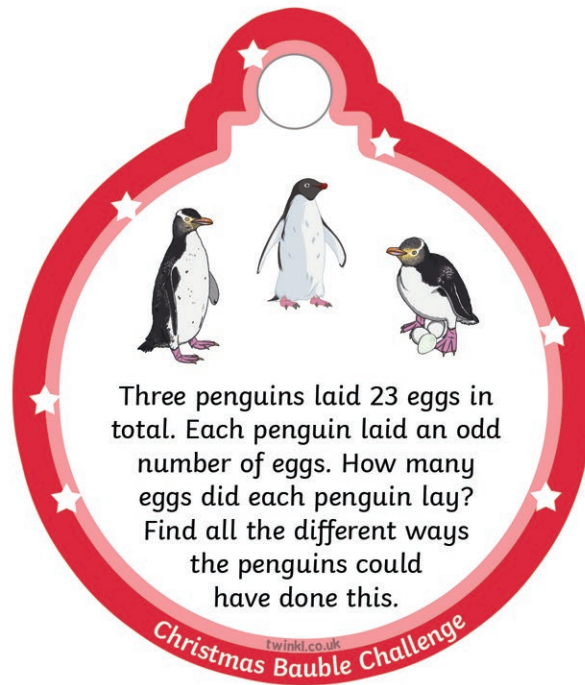
Pick a pair of puddings and add the 2 numbers together. Keep doing this to see how many answers you get. Now try it by taking away.

twinkl.co.uk
Christmas Bauble Challenge



A candy cane costs less than 20p. How much could the candy cane cost if you paid with exactly 3 coins?

twinkl.co.uk
Christmas Bauble Challenge



Three penguins laid 23 eggs in total. Each penguin laid an odd number of eggs. How many eggs did each penguin lay? Find all the different ways the penguins could have done this.

twinkl.co.uk
Christmas Bauble Challenge



Three penguins laid 14 eggs in total. Each penguin laid an even number of eggs. How many eggs did each penguin lay? Find all the different ways the penguins could have done this.

twinkl.co.uk
Christmas Bauble Challenge



2 5 >

Santa dropped the house number for present he was delivering. What could the house number be?

twinkl.co.uk
Christmas Bauble Challenge



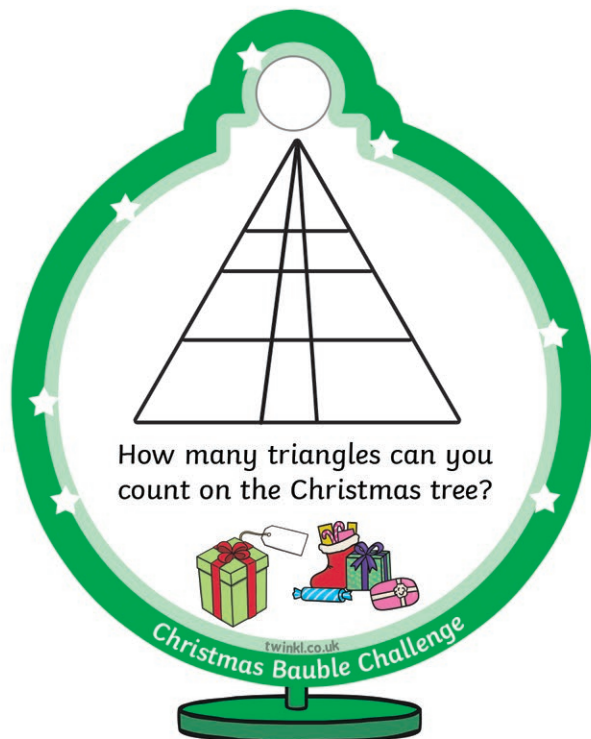
Help Santa get home by directing him left or right. Now think of all the different ways he can do this.

twinkl.co.uk
Christmas Bauble Challenge



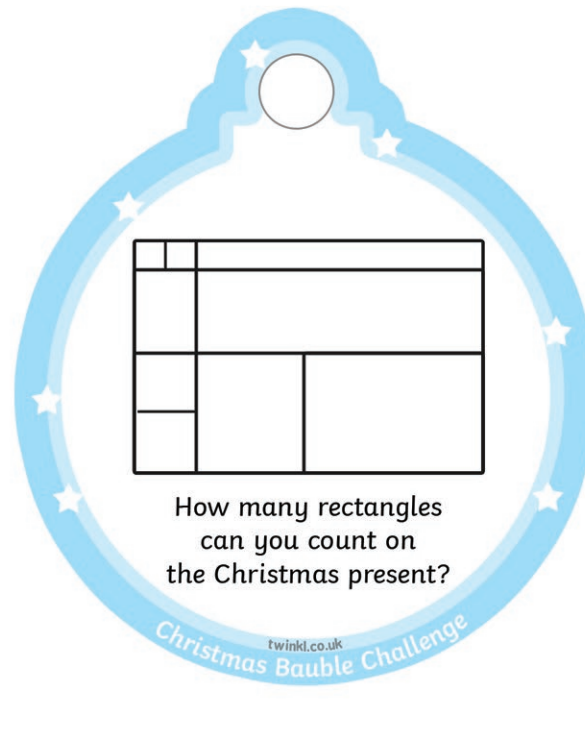
Santa is replying to wish lists and can write 25 a day. How many days would it take him to make 300 replies?

twinkl.co.uk
Christmas Bauble Challenge



How many triangles can you count on the Christmas tree?

twinkl.co.uk
Christmas Bauble Challenge



How many rectangles can you count on the Christmas present?

twinkl.co.uk
Christmas Bauble Challenge



The reindeers eat 20g of food for breakfast, lunch and dinner. How many grams of food will they eat in 5 days?

twinkl.co.uk
Christmas Bauble Challenge



A roll of wrapping paper covers 6 presents.
How many rolls of wrapping paper would be needed to wrap 30 presents?

twinkl.co.uk
Christmas Bauble Challenge



This gift costs £1.
What coins could you use to pay for it? You can only use silver coins.

twinkl.co.uk
Christmas Bauble Challenge



It takes Santa 3 hours to get to China, 7 hours to get to Australia, 11 hours to get to the UK and 12 hours to get home to the North Pole.
How long was he travelling for?

twinkl.co.uk
Christmas Bauble Challenge



I have 5 trees to decorate. I have 55 baubles, 20 pieces of tinsel, and 10 cans of snow spray. How many of each can I use on each tree if I share them equally?

twinkl.co.uk
Christmas Bauble Challenge



Pick a pair of puddings and add the 2 numbers together. Keep doing this to see how many answers you get. Now try it by taking away.

twinkl.co.uk
Christmas Bauble Challenge



The elves love collecting snowflakes. Some have 3 points, some have 4 points and some have 5 points. If they catch 3 snowflakes, what total numbers of points could they have? For example, three snowflakes with 3 points would have 9 points in total.

twinkl.co.uk
Christmas Bauble Challenge